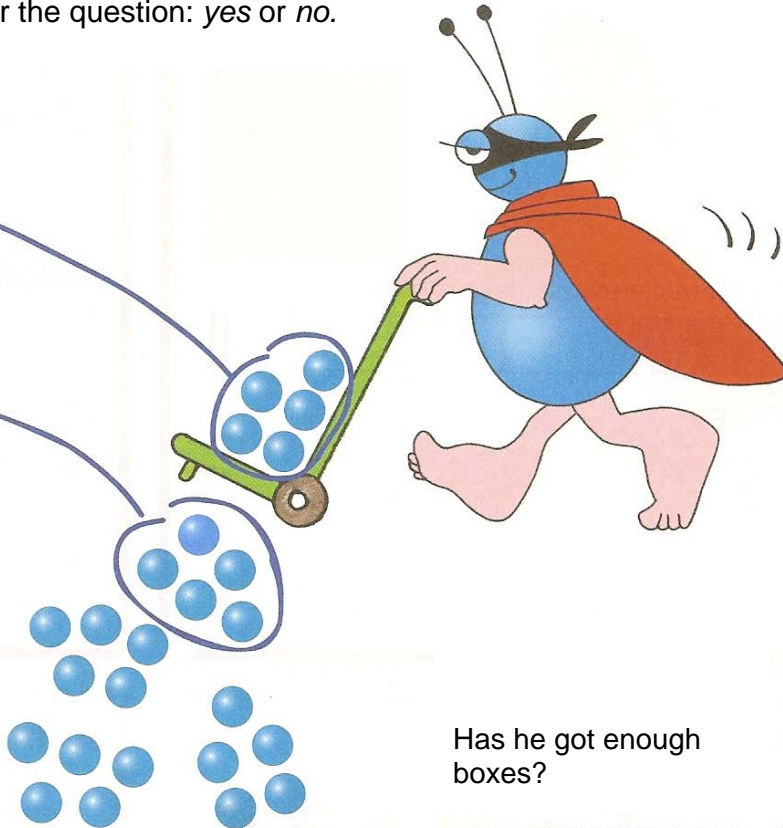
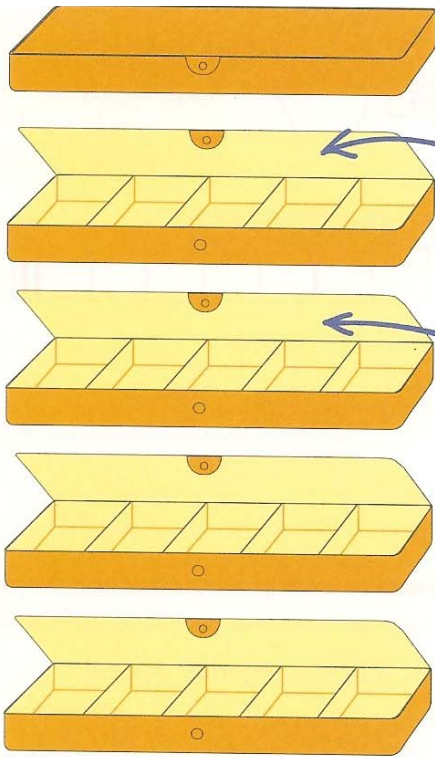


Flash cards



A

Pickmarble puts 5 marbles in each box and closes the lid. Has he got enough boxes? Join and answer the question: *yes* or *no*.



Has he got enough boxes?

B

Draw the marbles and stick a lid on only if the box is full.

3 →

5 →


4 →

5 →

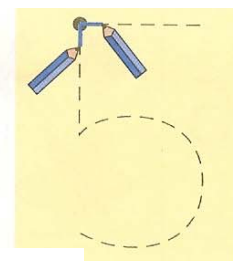
*The stickers to be used are at the end of this book.

C

Colour 5 fingers.



Write over again.



Colour the first 5 cases.



Write.

5 5 5 5 5

5 5 5 5 5

D

A. Same activity as on page 13.

B and C. Representing the first 5 numbers in a frame of 5 cases. In addition to calculating with these first 5 numbers, it will be a good preparation for introducing the frame of 10 cases, made of two boxes of 5 each.

D. Handwriting of the figure 5.