


Flash cards




A

Observe on the left side and complete on the right side.



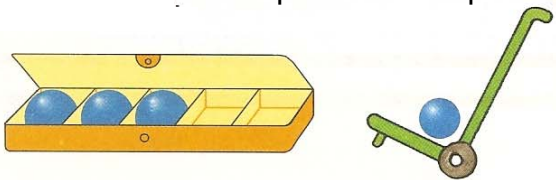
$$1 + 3 = 4$$



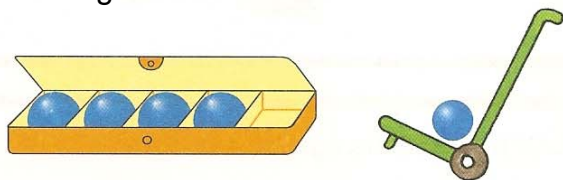
.....

B


Write down the equation corresponding to the drawing.



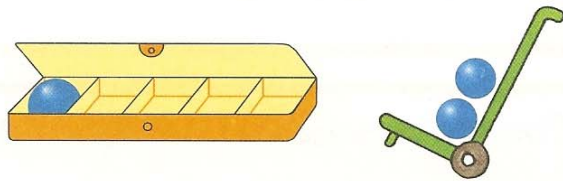
.....



.....



.....



.....

C

Colour 8 fingers.



Colour 7 fingers.



Colour 9 fingers.



D

Complete the number line and read all the numbers in it.



E

A. Same activity as on page 13.

B and C. Writing down the equation corresponding to a sum. Learners will take up the same task in different contexts (cf. for example pages 44 and 60).