

Dictation




A

Write down 5 and 10 only in the right cases.



Write down the numbers in the small clouds only. You must not complete the whole number line.



B

Calculate the sums.

$1 + 2 = \dots\dots$

$2 + 2 = \dots\dots$

$2 + 3 = \dots\dots$

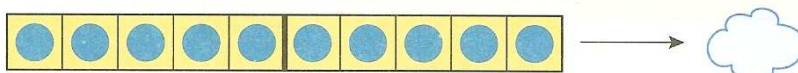

$3 + 2 = \dots\dots$

$4 + 1 = \dots\dots$

$1 + 3 = \dots\dots$

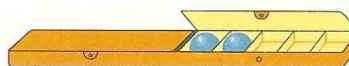
C

As soon as one side of the box is full with 5 marbles, stick its lid on and write down the number in the small cloud.



D

Write down the number of marbles in the small cloud.



E

A. Dictation: same activity as on page 24 but gradually faster and faster. The teacher shows the numbers on his (her) fingers and the learners write down the corresponding number.

B. Checking the landmarks 5 and 10 on the number line in order to locate other numbers.