


Mental arithmetic



A

Continue. Draw the marbles in the boxes, stick the lids on when necessary and draw as Dédé does.

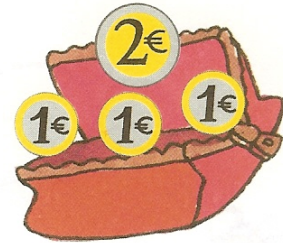



8	→		→	
6	→		→	
10	→		→	
7	→		→	
5	→		→	

B

Who has the largest amount of money?

Answer in the small clouds and complete the sentence.



Claire has €


Noel has €

Paul has €

It is _____ who has the largest amount of money.

C

Calculate. If you aren't sure, draw the marbles.



$3 + 2 = \dots\dots$

$6 + 4 = \dots\dots$

$2 + 4 = \dots\dots$

D

A. Mental arithmetic: same activity as on page 39. The teacher says for example "Be aware of what you have to put in the box first: 2 plus 6 equals..." The one number is ≤ 2 .

B. Relating two representations of the same number using groups of 5.