


Dictation




A


Check and complete if necessary.




10




14




12




13



16




15



B

Reproduce this drawing on the grid (use your ruler and start drawing from the blue dot).



C

Calculate. If you aren't sure, draw on your slate or on your rough book.

$7 - 6 = \dots\dots$


$7 - 5 = \dots\dots$

$10 - 8 = \dots\dots$

$9 - 6 = \dots\dots$

$9 - 8 = \dots\dots$

$6 - 5 = \dots\dots$



D