




In the second grid, place crosses in the same position as the dots which we can see in the first grid.




C

Draw as Dédé does.


23



18




27




D

Check and complete if necessary.


11



10



15




E

Write the first 5 doubles.

$1 + 1 = 2$

.....  
 .....

F



G

→ words such as 'lines' or 'columns', then 'first square, second square'... Squeaky's work has to be assessed line by line.